

RAISINA BENGALI SCHOOL ,C.R PARK
WORKSHEET
SUBJECT :- MATHS
CLASS :- I

Teacher:-Laboni Acharya

Q.1 Fill in the missing number (1 to 100)

1		3							10
	12		14			17		19	
21				25			28		
		33			36				40
41			44			47			50
	52			55			58		60
61		63			66			69	
			74			77		79	
	82				86				90
91		93					98		

Q.2 Write number names of the following.

a) 10 _____ d) 2 _____ g) 7 _____

b) 9 _____ e) 4 _____ i) 3 _____

c) 5 _____ f) 6 _____ j) 8 _____

Q.3 Write the numbers that come before and after the given numbers.


	9	
	18	
	5	
	16	
	10	



	14	
	13	
	3	
	11	
	17	



Q.4 Compare by filling in the >, < or = sign in the blank

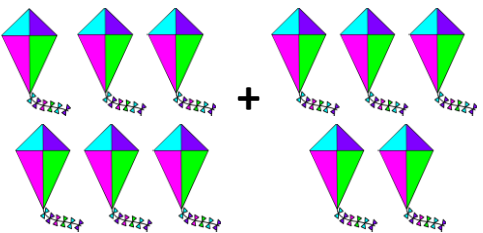
4 <input type="text"/>	3	6 <input type="text"/>	9	5 <input type="text"/>	7
8 <input type="text"/>	8	10 <input type="text"/>	1	6 <input type="text"/>	3


Q.5 Add the object and write the sum.

(a)  +  =

(b)  +  =

(c)  +  =

(d)  =

(e)  =

Q.6 Dodging

a. $6 \times 2 =$ _____

i. $2 \times 9 =$ _____

b. $3 \times 5 =$ _____

j. $3 \times 3 =$ _____

c. $4 \times 7 =$ _____

k. $6 \times 5 =$ _____

d. $6 \times 10 =$ _____

l. $2 \times 8 =$ _____

e. $5 \times 5 =$ _____

m. $6 \times 3 =$ _____

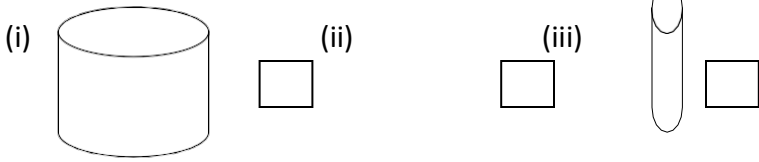
f. $2 \times 2 =$ _____

g. $3 \times 9 =$ _____

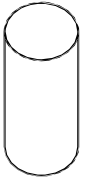

h. $4 \times 4 =$ _____

Q.7 Do as directed


(a) Tick (✓) the thickest object.



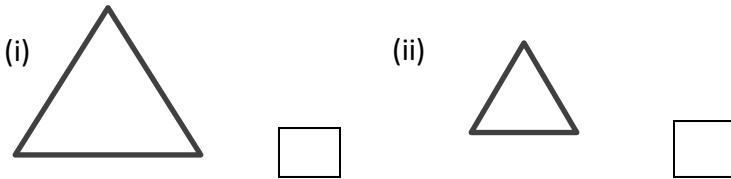
(b) Tick (✓) the bigger picture



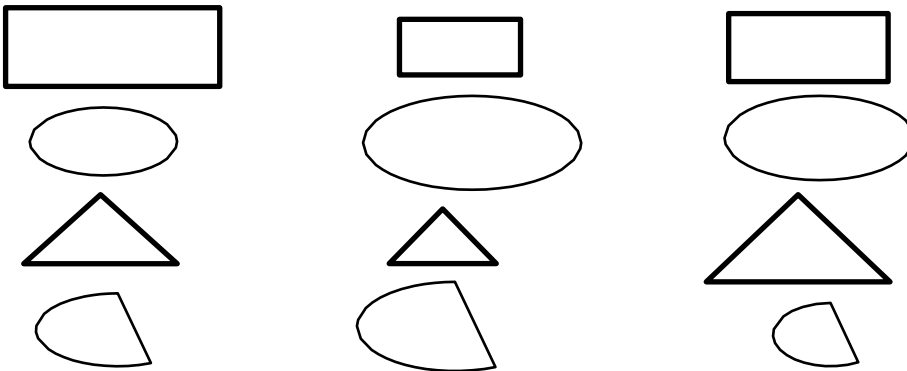
(c) Circle (O) the smaller picture




d) Tick (✓) the shorter object?






e) Colour the smallest shape:



f) Count and write



 = _____
  = _____
  = _____

g) Circle the biggest number:

(i) 11 20 10 8 2





(ii) 3 2 1 17 5

h) Circle the smallest number:

(i) 10 1 2 5 6

(ii) 11 17 15 4 19

Q.8 Cross out the shapes according to the number sentences. Then, find the answers.

 $8 - 5 = \underline{\quad}$
 $7 - 1 = \underline{\quad}$
 $5 - 3 = \underline{\quad}$
 $4 - 2 = \underline{\quad}$

